



MIĘDZYRZECKA MAŁA LIGA MATEMATYCZNA

KLASA III

etap 3

rok szkolny 2018/2019

Imię i nazwisko:



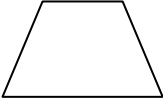
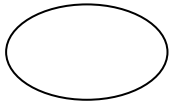
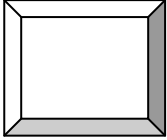

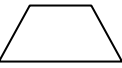


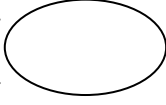

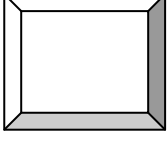

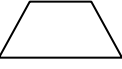
Szkoła:

Klasa:

- Czytaj uważnie wszystkie teksty i zadania.
- Rozwiązania zapisuj starannie i czytelnie w środku okienek.
- Nie używaj korektora. Pomyłki przekreślaj.
- Możesz zdobyć maksymalnie 22 punkty.
- Na dodatkowej kartce możesz wykonać potrzebne obliczenia.
- Na rozwiązanie masz 45 minut.

POWODZENIA!

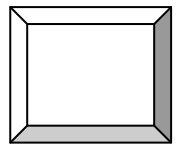
Zadanie 1

$9 \cdot 3 =$		 +  +  = 
$7 \cdot 7 =$		
$48 : 6 =$		
$6 \cdot 9 =$		 - ( - ) = 
$13 \cdot 4 =$		
$36 : 9 =$		

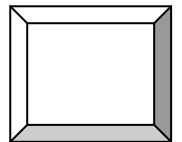
Zadanie 2

Mama robiła zakupy w sklepie. Kupiła pomarańcze za 3 zł, mleko za 1 zł 90 gr, jabłka za 2 zł 50 gr, chleb za 1 zł 70 gr, cytryny za 2 zł 30 gr. Który produkt był najtańszy? Ile kosztowały owoce?


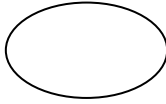
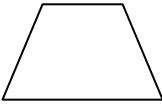

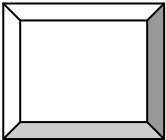

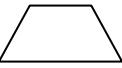
cena najtańszego produktu


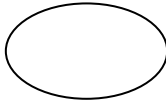
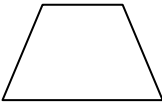

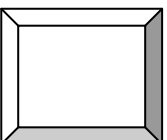
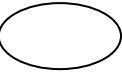



koszt wszystkich owoców


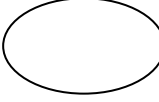


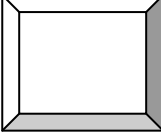

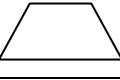

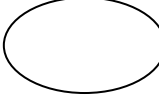


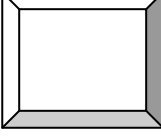

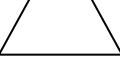


Zadanie 3

$80 : 80 =$		 -  +  = 
$2 \cdot 11 =$		
$3 \cdot 7 =$		

$64 : 8 =$		 :  +  = 
$7 \cdot 6 =$		
$18 : 9 =$		

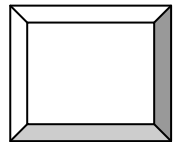
Zadanie 4

$7 \cdot 8 =$		 +  -  = 
$12 \cdot 5 =$		
$17 \cdot 2 =$		
$14 \cdot 4 =$		 :  +  = 
$8 \cdot 9 =$		
$81 : 9 =$		

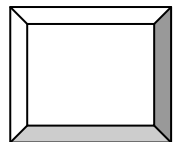
Zadanie 5

Temperatura powietrza w czwartek w nocy była równa -9°C , a w południe w piątek wynosiła $+5^{\circ}\text{C}$. W piątek w nocy temperatura spadła do -13°C . O ile stopni wzrosła temperatura od czwartku w nocy do południa w piątek? O ile stopni spadła temperatura od piątku w południe do piątku w nocy?



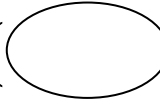
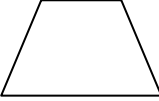
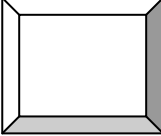




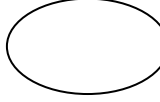

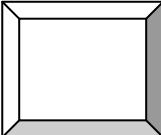

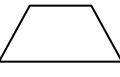
wzrost temperatury



spadek temperatury



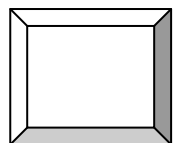
Zadanie 6

$10 \cdot 10 =$		 - ( - ) = 
$6 \cdot 6 =$		
$4 \cdot 9 =$		
$15 \cdot 4 =$		( - ) :  = 
$63 : 3 =$		
$24 : 8 =$		

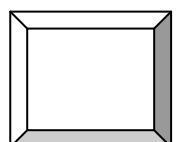
Zadanie 7

Kasia, uczennica pierwszej klasy codziennie czyta książki. Od poniedziałku do piątku każdego dnia przeznaczą po 6 minut na czytanie. W sobotę i niedzielę Kasia czyta po 2 kwadransy. Ile minut tygodniowo poświęca Kasia na czytanie? Ile to kwadransów?


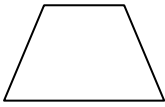
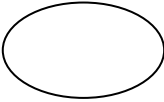

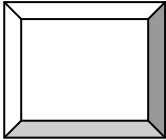

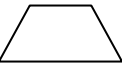


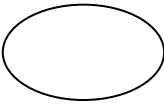
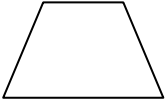
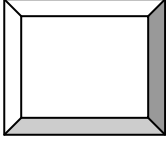

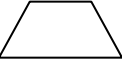
minuty



kwadransy



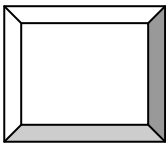
Zadanie 8

$3 \cdot 3 =$		 -  +  = 
$3 \cdot 11 =$		
$18 \cdot 4 =$		
$25 \cdot 4 =$		 : ( - ) = 
$8 \cdot 8 =$		
$3 \cdot 20 =$		

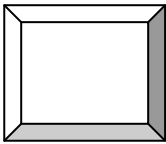
Zadanie 9

Marysia waży o 16 kg mniej od swego brata Filipa, który waży 43 kg. Ich mama waży o 9 kg więcej niż oni razem. Ile waży Marysia? Ile waży mama?


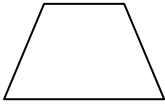

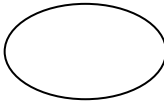
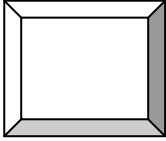

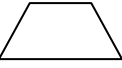
waga Marysi


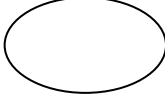


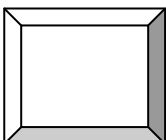

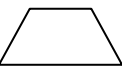


waga mamy



Zadanie 10

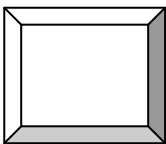
$48 : 4 =$		 -  ·  = 
$11 \cdot 0 =$		
$6 \cdot 8 =$		

$3 \cdot 5 \cdot 3 =$		 +  -  = 
$54 : 9 : 3 =$		
$3 \cdot 4 \cdot 3 =$		

Zadanie 11

Tata Olka w 2018 r. wyjechał do pracy do Norwegii w czerwcu, lipcu i sierpniu. Ile miesięcy w roku 2018 tata spędził w domu z rodziną? Ile dni pracował za granicą?

Ilość miesięcy spędzonych w domu



Ilość dni spędzonych w Norwegii

